

Name: _____

Date: _____

Extra Practice (7.3)

Write an inequality for each sentence. (lesson 7.3)

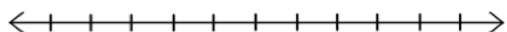
1) More than 100,000 fans attended the opening football game at The Ohio State University.

2) Her earning at \$16 per hour were no more than \$96.

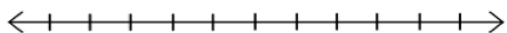
3) A number increased by seven is at least forty-five.

Graph each inequality on a number line. (lesson 7.3)

4) $a > 2$



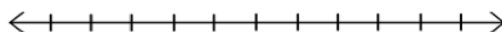
6) $f < 0$




8) $3 \geq y$




5) $w \leq -4$



7) $-6 < e$



9) $11 \leq c$



Write the inequality for each graph. (lesson 7.3)

